

Key stage 3 mathematics 2003
 Mental mathematics Test C

First name _____

Last name _____

School _____

Total marks

Time: 5 seconds continued

7	<input type="text"/>	<input type="text"/>
---	----------------------	----------------------

8	<input type="text"/>	-5	<input type="text"/>
---	----------------------	----	----------------------

9	<input type="text"/>	n	<input type="text"/>
---	----------------------	-----	----------------------

Time: 10 seconds

10	<input type="text"/>	2pm	<input type="text"/>
----	----------------------	-----	----------------------

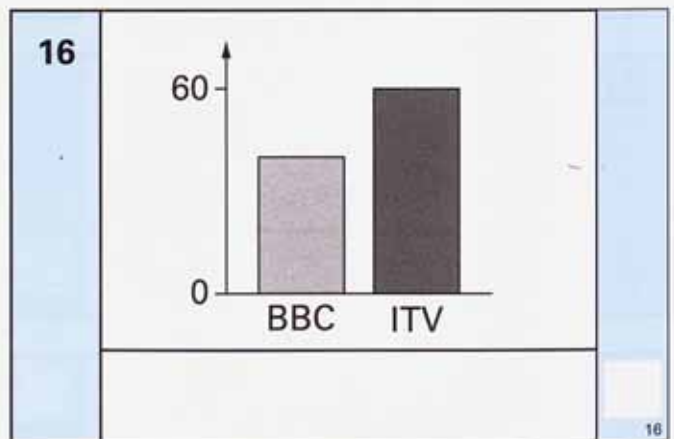
11	5.3, 5.2, 5.1, _____, _____	<input type="text"/>
----	-----------------------------	----------------------

12	£	9p	<input type="text"/>
----	---	----	----------------------

13	<table border="1" style="margin: auto;"> <tr><td> </td><td> </td><td> </td><td> </td></tr> <tr><td> </td><td> </td><td> </td><td> </td></tr> </table>									<input type="text"/>

14	<input type="text"/>	72 38	<input type="text"/>
----	----------------------	-------	----------------------

15	<input type="text"/>	<input type="text"/>
----	----------------------	----------------------



Practice question

<input type="text"/>	<input type="text"/>	30	<input type="text"/>
----------------------	----------------------	----	----------------------

Time: 5 seconds

1	<input type="text"/>	<input type="text"/>
---	----------------------	----------------------

2	<input type="text"/>	<input type="text"/>
---	----------------------	----------------------

3	£	£38.95	<input type="text"/>
---	---	--------	----------------------

4	<input type="text"/>	$a + b = 20$	<input type="text"/>
---	----------------------	--------------	----------------------


5	£	50%	<input type="text"/>
---	---	-----	----------------------


6	<input type="text"/>	<input type="text"/>
---	----------------------	----------------------

Time: 10 seconds continued

17		17
-----------	--	----

18	£	£9.50	18
-----------	---	-------	----

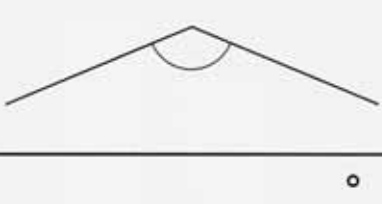
19		19
-----------	---	----

20		20
	pupils	

21		21
-----------	--	----

22	0.6 1 1.4 1.8 2.2	22
-----------	---------------------------	----

23		23
-----------	--	----


24		24
-----------	---	----

25		$3a + 4a + 2a$	25
-----------	--	----------------	----

Time: 15 seconds

26	Grey Rd	10 30	10 50	11 10	26
	Station	10 48	11 08	

27		18 19 20 21 22	27
-----------	--	------------------------	----

28		28
-----------	---	----

29	red	3	29
	blue	7	
	green	10	

30		$34 \times 56 = 1904$ 35×56	30
-----------	--	---	----