

2017 national curriculum tests


Key stage 1

Mathematics

Paper 2: reasoning

First name	
Middle name	
Last name	

Total marks	
-------------	--



Amy



Ajay

Sam

Ben

Sita

Kemi

Practice question

Ajay




Amy



footballs

1

Ben



Kemi



Sam



Sita



A rectangular box with a blue border, containing the letter 'p' in the bottom right corner.



1 mark

2

110

111

1001

101

200



1 mark

3

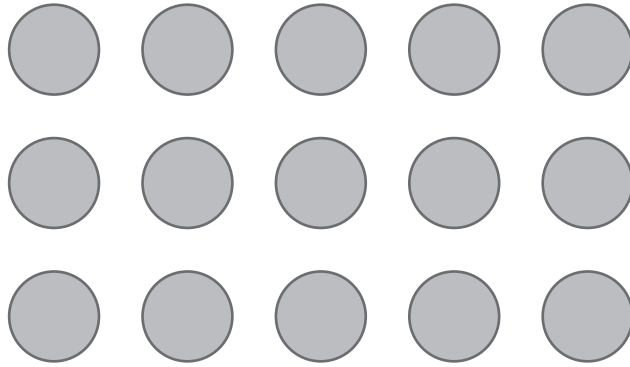
63

bean bags



1 mark

4



$$5 + 3$$

$$5 - 3$$

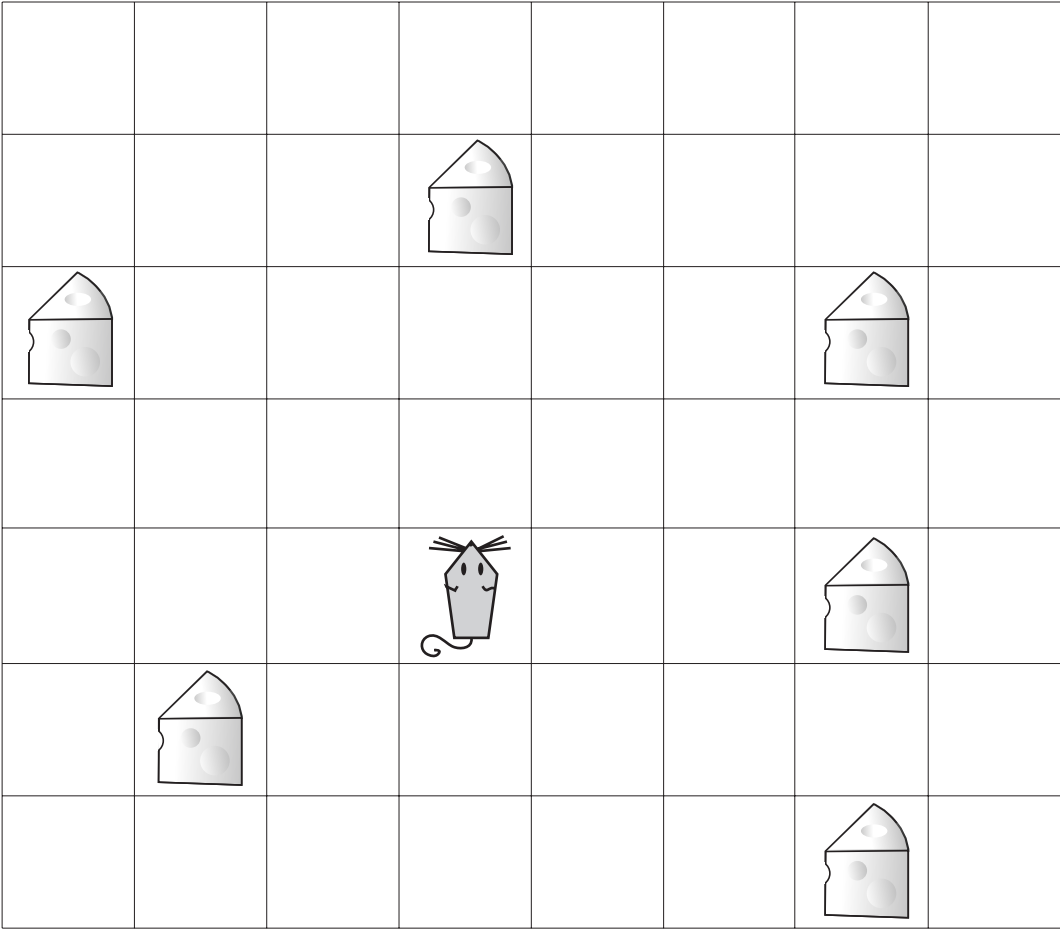
$$5 + 5$$

$$5 \times 3$$



1 mark

5



1 mark

6

Write these numbers in order, starting with the smallest.

73 37 76 36 63

smallest

largest



1 mark

7

Circle the **shortest** time.

70 minutes

10 minutes

45 minutes

1 hour



1 mark

8

A game costs £25

Ben has £19



How much **more** money does Ben need to buy the game?

£



1 mark

9

Circle the **two** numbers that are even.

73

58

64

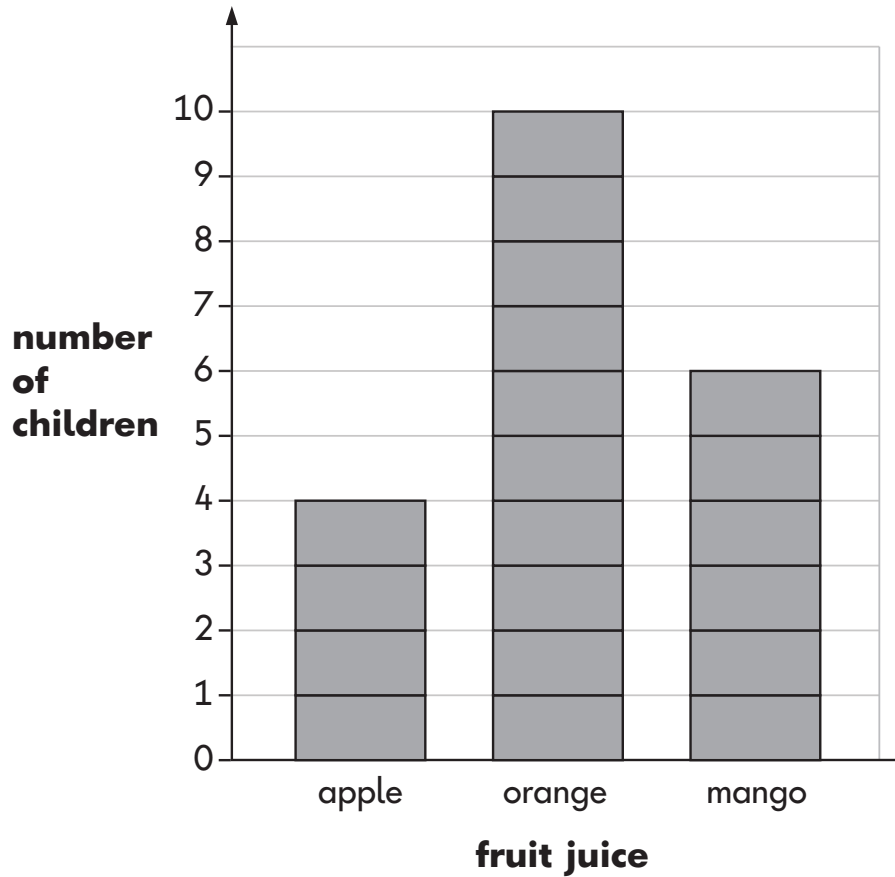
45



1 mark

- 10 20 children choose their favourite fruit juice.

The chart shows the results.



- (a) How many **more** children choose orange than apple?

children



1 mark

- (b) Another boy joins the group.


He chooses **mango** juice.

Add this information to the chart.



1 mark

11



What time does the clock show?

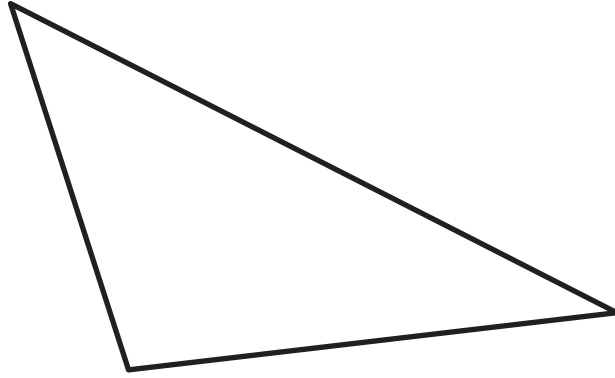
Tick the correct box.

 twenty to 6 half past 9 half past 8 quarter to 6

1 mark

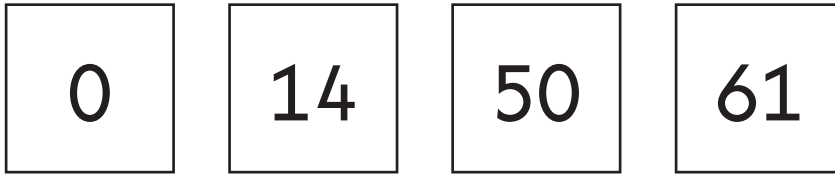
12 Measure the longest line.

Use a ruler.



1 mark

13 Look at these numbers.



Write each number **once** to make these correct.

$$\square > \square$$

$$\square > \square$$




1 mark

14

20 bananas are shared equally among 4 monkeys.

How many bananas does **each** monkey get?



bananas



1 mark

15 Fill in the missing numbers to make each pair of cards **total 17**

One pair is done for you.

10	7
----	---

9	
---	--

	6
--	---

○
1 mark

16

Look at these coins:



What is the largest amount you can make using **three** of these coins?

p



1 mark

17

Ben ate half a pizza.

Which fraction shows the amount he ate?



Circle it.

$$\frac{1}{4}$$

$$\frac{1}{3}$$

$$\frac{2}{4}$$

$$\frac{3}{4}$$



1 mark

18Write six **different** numbers to make these sums correct.

$$\square + \square = 27$$


$$\square + \square = 27$$

$$\square + \square = 27$$



2 marks

19 Ben and Sita count cars.



Ben counts **38** red cars.

Sita counts **23** blue cars.

How many cars do they count **altogether**?

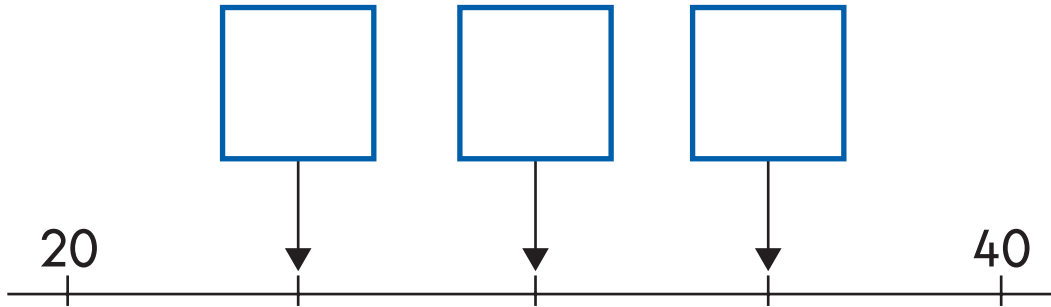
cars



1 mark

- 20** The numbers on this number line go up by the **same amount** each time.


Write the missing numbers in the boxes.



1 mark

- 21** Ajay, Sam and Kemi have 4 conkers each.

How many conkers do they have **altogether**?


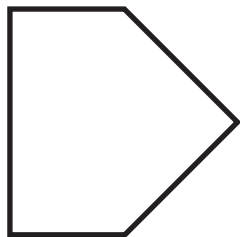
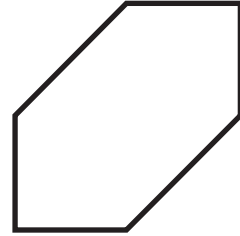
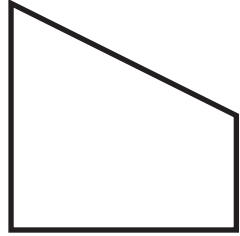


conkers



1 mark

22 Tick the **pentagon**.



1 mark


23 Write the missing number to make this number sentence correct.

$$9 + 7 - \square = 12$$



1 mark

24 Tick the shape that has exactly $\frac{1}{3}$ shaded.



1 mark

25 Complete these sums.

One is done for you.

$$\boxed{3} + \boxed{7} = \boxed{10}$$

$$\boxed{33} + \boxed{} = \boxed{40}$$

$$\boxed{} + \boxed{7} = \boxed{80}$$

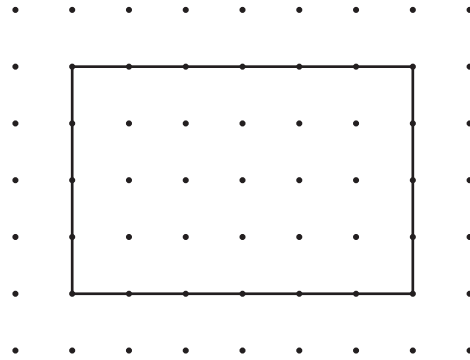


1 mark

26

Draw lines to divide the rectangle into quarters.


Use the dots to help you.



1 mark

27

Ben has 4 boxes of eggs.



Write a number sentence using \times and $=$ to show that Ben has **24** eggs altogether.



1 mark

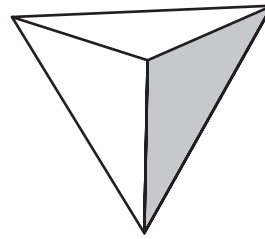
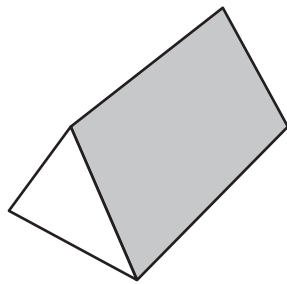
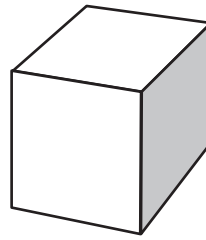
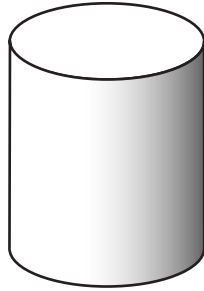
28There are **55** cakes.**20** boys and **19** girls each take a cake.How many cakes are **left**?Show
your
working

cakes


2 marks

29Two shapes have **more than 8** edges.

Tick them.




1 mark

30 There are **76** cars in the car park.

18 more cars go into the car park.

Then **35** cars go out.



How many cars are in the car park **now**?


Show
your
working

cars




2 marks

31 The strawberry weighs **24** grams.



The strawberry and tomato together weigh **69** grams.



What does the tomato weigh?

g

1 mark

End of test

[BLANK PAGE]

Please do not write on this page.

[BLANK PAGE]

Please do not write on this page.



Standards
& Testing
Agency

2017 key stage 1 mathematics

Paper 2: reasoning

Print version product code: STA/17/7728/p ISBN: 978-1-78644-267-3

Electronic PDF version product code: STA/17/7728/e ISBN: 978-1-78644-287-1

For more copies

Additional printed copies of this booklet are not available. It can be downloaded from www.gov.uk/government/publications.

© Crown copyright and Crown information 2017

Re-use of Crown copyright and Crown information in test materials

Subject to the exceptions listed below, the test materials on this website are Crown copyright or Crown information and you may re-use them (not including logos) free of charge in any format or medium in accordance with the terms of the Open Government Licence v3.0 which can be found on the National Archives website and accessed via the following link: www.nationalarchives.gov.uk/doc/open-government-licence.

When you use this information under the Open Government Licence v3.0, you should include the following attribution: 'Contains public sector information licensed under the Open Government Licence v3.0' and where possible provide a link to the licence.



Exceptions – third-party copyright content in test materials

You must obtain permission from the relevant copyright owners, as listed in the '2017 key stage 1 tests copyright report', for re-use of any third-party copyright content which we have identified in the test materials, as listed below. Alternatively you should remove the unlicensed third-party copyright content and/or replace it with appropriately licensed material.

Third-party content

These materials contain no third-party copyright content.

If you have any queries regarding these test materials contact the national curriculum assessments helpline on 0300 303 3013 or email assessments@education.gov.uk.